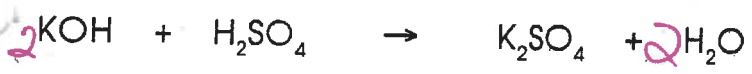
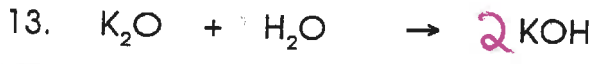

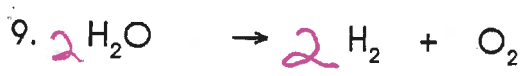
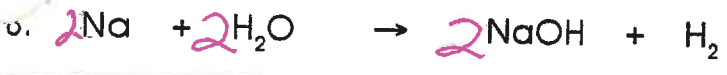
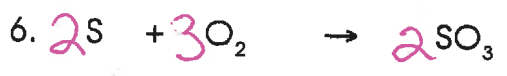
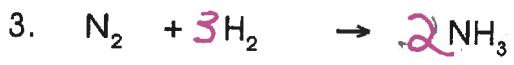
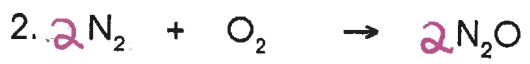
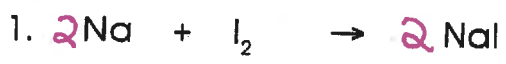


13.2 BALANCING EQUATIONS

Name Key

Balance the following chemical equations.



Name: _____

Date: _____

13.3 Balancing Equations

Balance the following chemical equations.



Name: _____

Date: _____

13.4 Balancing Equations

Balance the following chemical equations.

